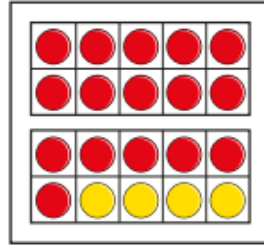
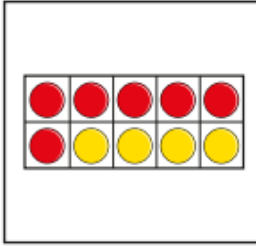


Maths skill to practice this week: **find and make number bonds to 20.**

- Complete the sentences for each picture.



There are _____ red counters.

There are _____ yellow counters.

There are _____ counters altogether.

_____ + _____ = _____

- Continue the pattern to find all the number bonds to 20

$$20 = 20 + 0$$

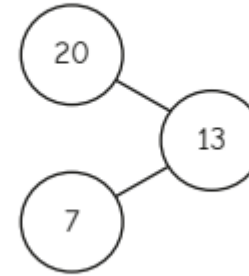
$$20 = 19 + 1$$

$$20 = 18 + 2$$

$$20 = 17 + 3$$

How do you know that you have found them all?

Kay shows a number bond to 20 in a part-whole model.



What mistake has Kay made?

There are
11 bonds to 10,
so there are
22 bonds to 20



Do you agree with Ron?

Why?