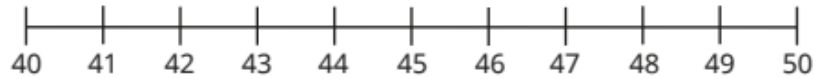


Maths skill to practice this week: **the number line to 50**


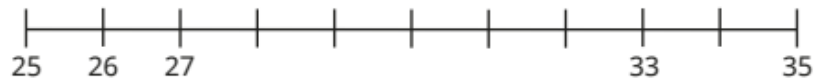
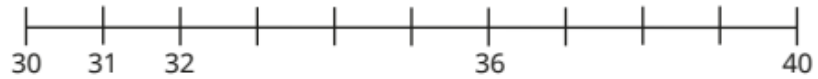
- Circle all the numbers on the number line that are less than 23



- Circle all the numbers on the number line that are greater than 45

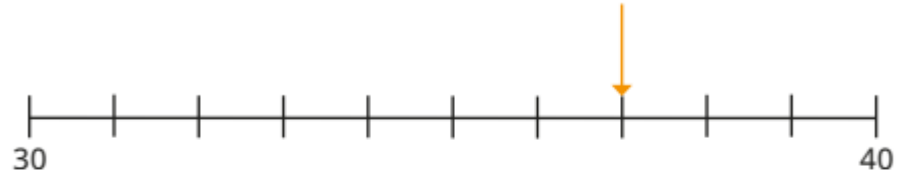


- Complete the number lines.



What is the same about the number lines? What is different?

Ben draws an arrow on the number line.



Which picture matches Ben's number?

