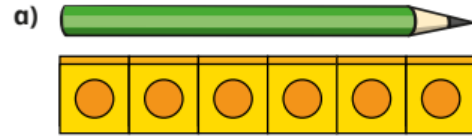

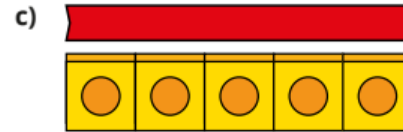


Maths skill to practice this week: **measure length using objects**

1 How long is each object in cubes?





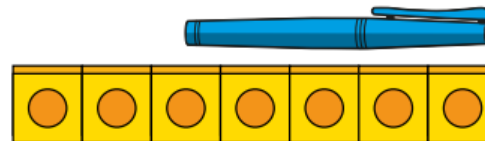


d) Use cubes to measure some objects in your classroom.

2



The pen is
7 cubes long.



Do you agree with Jo?

Talk about it with a partner.

Measure objects in your home with these items:

- cubes
- hands
- sticks

Compare the lengths and heights of your objects.