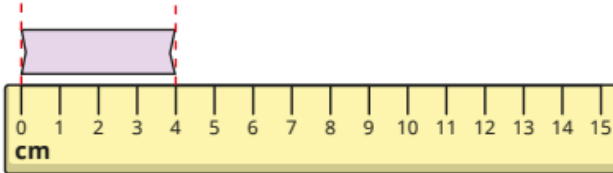


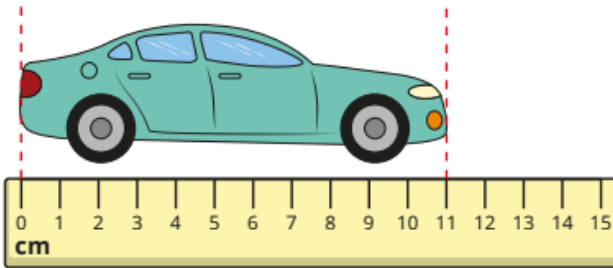
Maths skill to practice this week: **measure length in centimetres**

- How long is the ribbon?




The ribbon is _____ cm long.

- What is the length of the car?



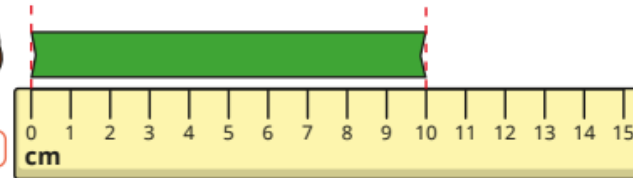
- How tall is the giraffe?



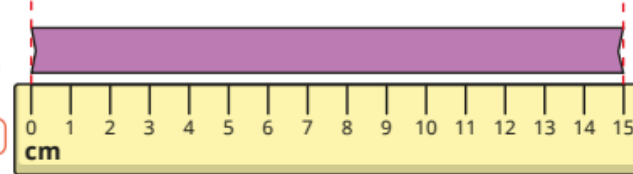
Jo, Max and Sam are comparing the lengths of some ribbons.



Jo



Max



Sam



My ribbon is shorter than Max's, but longer than Jo's.

How long could Sam's ribbon be?