


Maths skill to practice this week: **measure mass**

1 What is the mass of each object?


a)



b)



c)

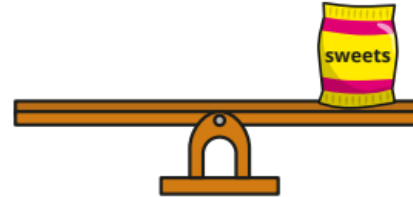


2 Draw cubes to balance the scales.

a) The mass of the toy car is 6 cubes.



b) The mass of the sweets is 4 cubes.



3 Use cubes to measure the mass of objects in your classroom.

Complete this sentence for each object.

The mass of \_\_\_\_\_ is  cubes.

Compare answers with a partner.