



Maths skill to practice this week: **make arrays**

1 Circle each row of sweets.




How many rows are there?

2 Circle each column of apples.



How many columns are there?

3 Make this array.



Complete the sentences.

a) There are counters in each row.

There are rows.

There are counters altogether.

b) There are counters in each column.

There are columns.

There are counters altogether.

4 Make your own array.

How many rows are there?

How many columns are there?