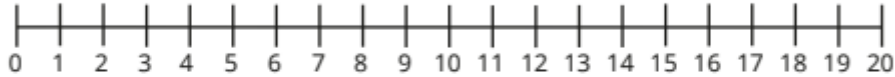


Maths skill to practice this week: *use a number line to 20.*

- Ann counts from 8 to 15


Circle all the numbers that she will say.




- Circle all the numbers that are greater than 7



All number lines start from 1



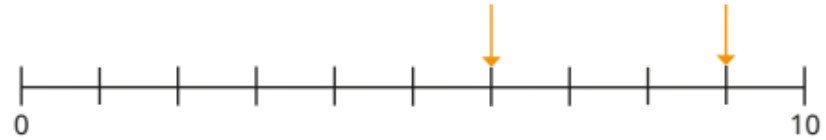
Do you agree with Tiny?
Why?



- Circle all the numbers that are less than 13



- What numbers are the arrows pointing to?



- Label 15, 12 and 9 on the number line.



Label 7, 17 and 19 on the number line.

