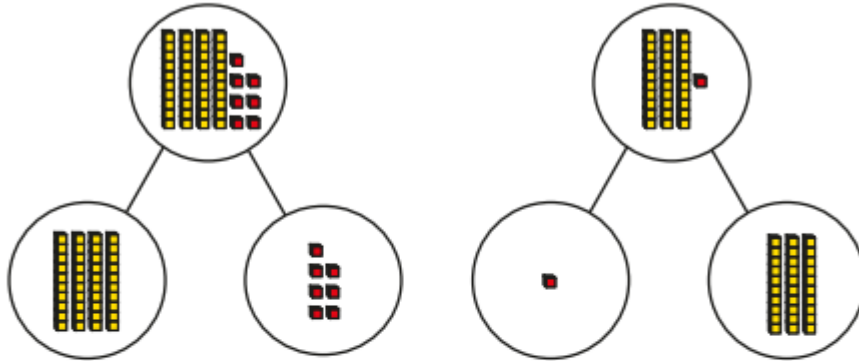


Maths skill to practice this week: **partition into tens and ones.**

- Complete the sentences to describe each part-whole model.

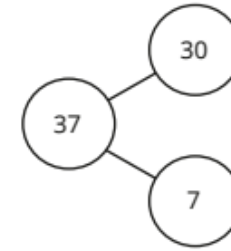
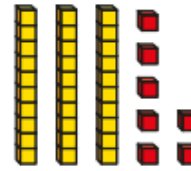


- _____ is a part and _____ is a part.
 _____ is the whole.

There are _____ tens.
 There are _____ ones.
 The number is _____

What do you notice?

- How does the part-whole model match the base 10?



- Use a part-whole model to partition each number into tens and ones.

