






Maths skill to practice this week: **systematic number bonds within 10.**



Use two different-coloured crayons.

Colour the counters to find all the bonds to 4

	_____ + _____ = 4
	_____ + _____ = 4
	_____ + _____ = 4
	_____ + _____ = 4
	_____ + _____ = 4

Which number sentences show the same bond?

The butterfly has lost its spots!



How many ways can you put them back on?

Work systematically to find all the different ways.

Draw your answers.