


Last term (Y1)

Share 12 apples equally on 4 plates



Previous learning...

Here are some cards.



Pick two cards, what is the greatest total you can make?

Pick two cards, what is the smallest total you can make?

We are currently learning...

Complete the additions

a) $14 + 9 =$

d) $7 + 15 =$

b) $18 + 4 =$

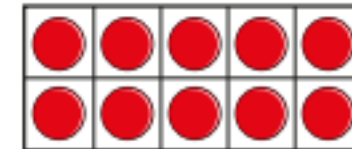
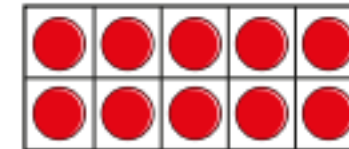
e) $4 + 19 =$

c) $19 + 6 =$

f) $18 + 3 =$

We are learning next...

Use the 10 frame to work out the subtractions.



a) $20 - 2$

b) $20 - 5$

c) $20 - 8$

d) $20 - 3$