

Last term

Write < = or > to make the statements correct

25	<input type="text"/>	25
59	<input type="text"/>	95
81	<input type="text"/>	73

84	<input type="text"/>	66
43	<input type="text"/>	34
50	<input type="text"/>	50

Previous learning

Write <, > or = to compare the amounts

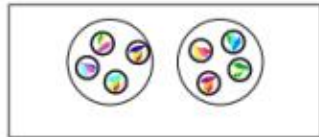
a) 

b) 

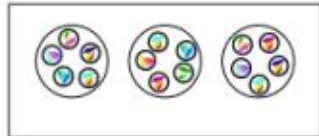
We are currently learning

Match the sentences to the pictures.

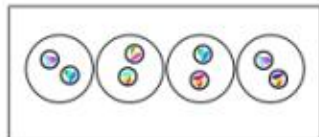
There are 3 equal groups with 5 in each group.



There are 4 equal groups with 2 in each group.



There are 2 equal groups with 4 in each group.



We are learning next

Complete the sentences



There are equal groups with in each group.

+ + = 18