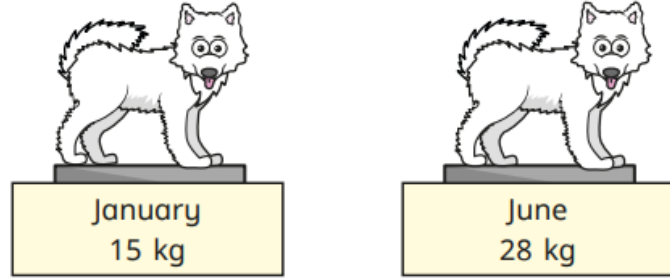


Last term

Mo weighs his dog in January and June.




a) How much heavier is the dog in June?

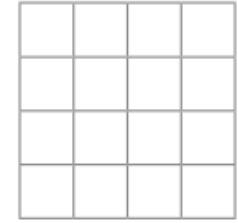
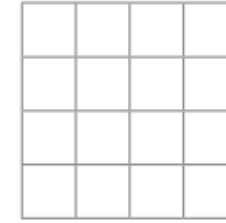
kg

Previous learning

Here is one way to colour the square to show equal parts.




Find two more ways to colour the square to show equal parts.



Current learning

Circle $\frac{1}{3}$ of each group.

Complete the number sentences.



$\frac{1}{3}$ of 15 =



of =

We are learning next

Tick the shapes that have 1 equal part shaded.

