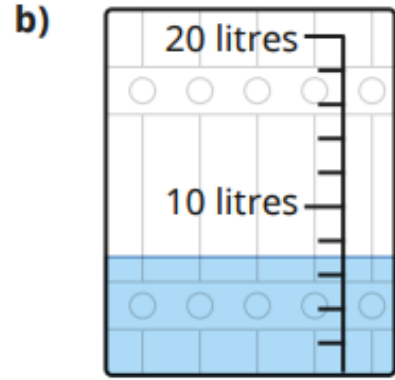
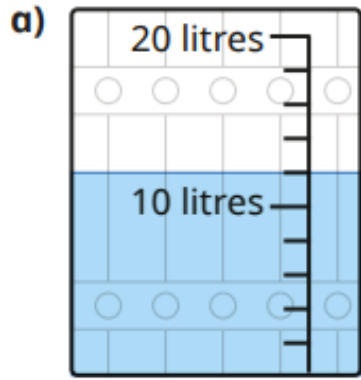



Last term The capacity of each barrel is 20 litres.  
How much water is in each barrel?




Previous learning

Find  $\frac{1}{2}$  of each number.

Use the arrays to help you.



$$\frac{1}{2} \text{ of } 10 = \square$$





$$\frac{1}{2} \text{ of } 16 = \square$$

Current learning

What fraction of each shape is shaded?








We are learning next

Tick the shapes that have  $\frac{3}{4}$  shaded.

