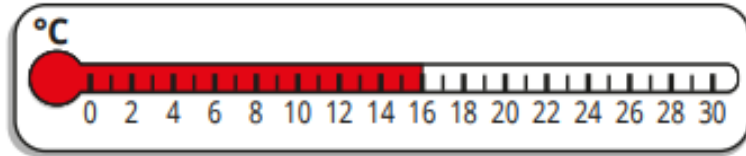


Last term

The thermometer shows the temperature in London.



The temperature rises by 5 degrees.

Colour a thermometer to show the new temperature.

Previous learning

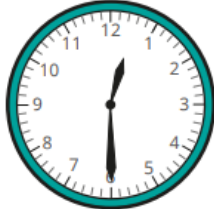
Find the wholes.

a)  $\frac{1}{2}$  of  = 5


b)  $\frac{1}{3}$  of  = 3

Current learning

Circle to show whether each sentence is true or false.

a)  The clock shows 6 o'clock.

**true**                      **false**

b)  The clock shows half past 10.

**true**                      **false**

We are learning next

The clocks show where the minute hand starts and finishes.



How many minutes have passed?