

Last term

Complete the statements.

a) cm < 41 cm

b) 14 m < m

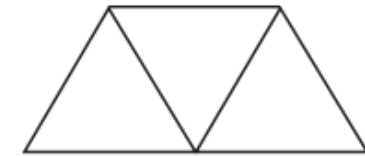

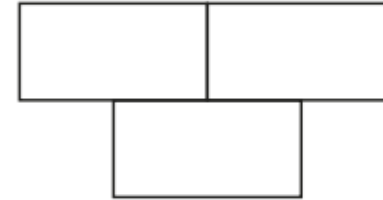
c) 14 cm > cm

d) 12 m < m < 20 m

Is there more than one answer for each?

Previous learning

Colour $\frac{2}{3}$ of each shape.



Current learning

Write the times shown on the clocks.

a)



minutes past 2

b)



minutes past 4

We are learning next

Write <, > or = to make the statements correct.

a) 55 minutes 1 hour and 5 minutes

b) quarter of an hour 70 minutes

c) 85 minutes 1 hour and 20 minutes

d) 90 minutes one and a half hours