



## Last term



Write the times shown on the clocks.

a)   minutes to 12

b)   minutes to 1

## Previous learning

 = 2 goals

Name	Goals
Ben	
Sam	
Tom	

Complete the sentences.

Ben scores  goals.

Sam scores  goals.

Tom scores  goals.

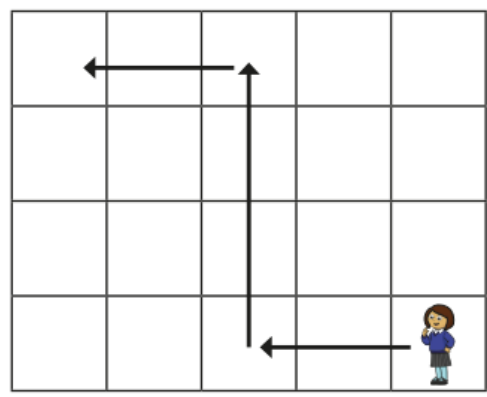
## We are currently learning

Complete the sentences

First she walks  squares forwards.

Then she turns \_\_\_\_\_ and walks  squares forwards.

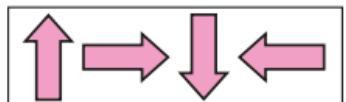
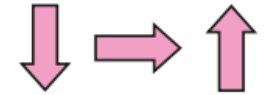
Then she turns \_\_\_\_\_ and walks  squares forwards.



## We are learning next

Tick the shape that come next in the pattern.

a)  

b)  

c)  