

Last term

How many pears are there?



$$\square + \square + \square = \square$$

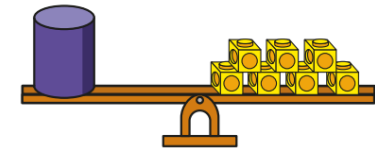
$$\square \times \square = \square$$

There are pears.

Previous learning

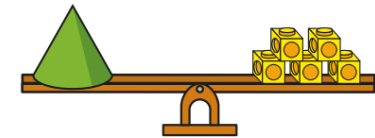
What is the mass of each object?

a)



cubes

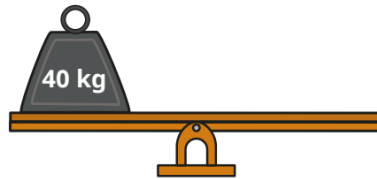
b)



cubes

c) Which object is heavier? _____

We are currently learning



a) Circle the weights that will balance the scale.



We are learning next

Here are three glasses.



A



B



C

a) Which glass is empty? _____

b) Which glass is half full? _____

c) Which glass is full? _____