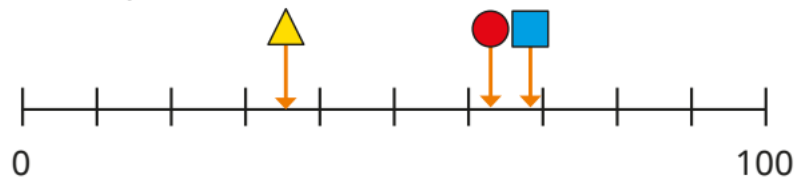


Previous term

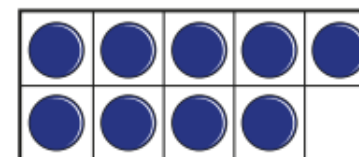
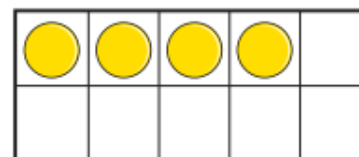
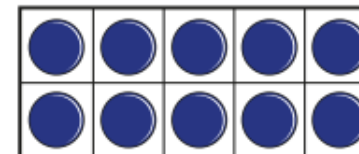
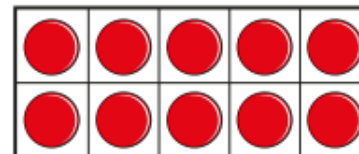
The shapes show numbers on a number line.



Match the shapes to the numbers.

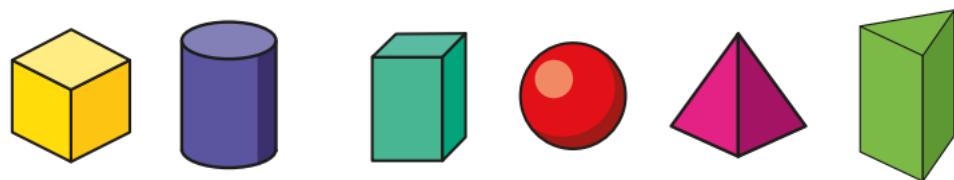
Previous learning

$$10 + 4 = 19 - \square$$



We are currently learning...

Match the shape to its name



- | | | | | | |
|--|--|--|--|--|--|
| | | | | | |
|--|--|--|--|--|--|

We are learning next...

Tick the shapes that have 3 vertices and circle the shapes that have 4 sides.

