





Last term

The pictogram shows the number of children who visited a park last week.

Day	Number of children
Monday	
Tuesday	
Wednesday	
Thursday	
Friday	

Key = 10 children

- ▶ How many children visited the park on Monday?
- ▶ How many children visited the park on Wednesday?

Previous learning

Use the column method to work out the additions.


		4	7	
	+	3	8	
		<hr/>		
		<hr/>		

		2	4	7
	+	5	3	8
		<hr/>		
		<hr/>		

		3	6	4	7	
	+	4	9	2	8	
		<hr/>				
		<hr/>				

We are currently learning

The array shows that 4 and 5 are factors of 20



How many other arrays can you make using 20 counters?

Use your arrays to find all the factors of 20

We are learning next

A prime number has exactly two factors: 1 and itself.

A composite number has more than two factors.

Which of the numbers are prime and which are composite?

