
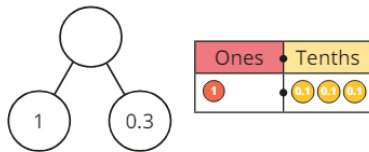
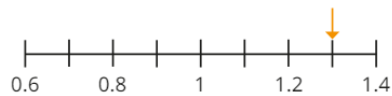


## Last term

Which representation is the odd one out?



Explain your answer.

## Previous learning

Complete the table.

Size of cube	Calculation	Number of cubes
$1^3$		1
$2^3$		8
$3^3$	$3 \times 3 \times 3$	
$4^3$		
$5^3$		
$6^3$	$6 \times 6 \times 6$	

## We are currently learning

Complete the table.

Days	Weeks and days
42 days	
	5 weeks and 5 days
	10 weeks and 5 days
100 days	

## We are learning next

Each cube has a volume of  $1 \text{ cm}^3$

What are the volumes of the shapes?

In each pair, which shape has the greater volume?

