
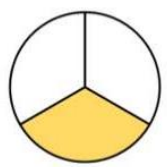
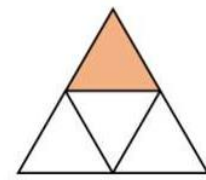


Last term

3 Tick the images that show $\frac{1}{3}$ shaded.



Previous learning

5 Complete the number track.



6 Here are some digit cards.

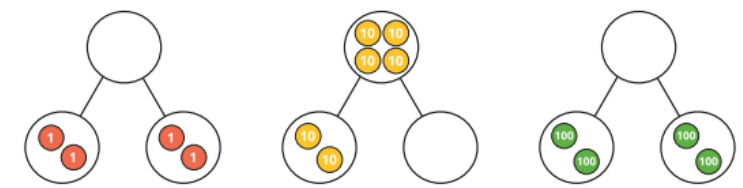


Kim uses the cards to make a 3-digit number.

Write all the numbers between 250 and 550 that Kim can make.

We are currently learning

Complete the part whole models.



What do you notice?

Hundreds	Tens	Ones

We are learning next

Complete the table.

- 300	Number	+ 300						
<table border="1"> <thead> <tr> <th>H</th> <th>T</th> <th>O</th> </tr> </thead> <tbody> <tr> <td> </td> <td> </td> <td> </td> </tr> </tbody> </table>	H	T	O					
H	T	O						
		606						