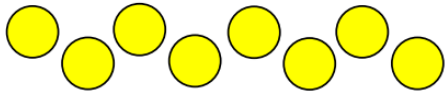


## Last term

4 Here are some counters.




Ron takes  $\frac{1}{2}$  of the counters.

How many counters does Ron take? \_\_\_\_\_

Max takes  $\frac{1}{4}$  of the counters.

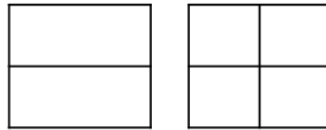
How many counters does Max take? \_\_\_\_\_

5 Sam says,

$\frac{1}{2}$  is the same as  $\frac{2}{4}$  

Is Sam correct?                      yes    no

Use the shapes below to show why.



## Previous learning

7 What is 100 less than 719?

What is 10 more than 97?

What is 10 less than 205?

## We are currently learning

Work out the additions.

	T	O	
	7	3	
+	2	5	
<hr/>			
<hr/>			

	H	T	O	
	5	2	4	
+	3	7	3	
<hr/>				
<hr/>				

	H	T	O	
	1	0	7	
+	4	0	1	
<hr/>				
<hr/>				

## We are learning next

Brett and Jack are playing a game.  
Brett has 213 points.  
Jack has 102 more points than Brett.  
How many points do they have altogether?

I think the answer is 315



What mistake has Tiny made?

