





## Last term

- 4 The pictogram shows how many eggs some hens laid each day.

Day	Number of eggs
Monday	
Tuesday	
Wednesday	
Thursday	
Friday	

Each  represents 2 eggs.

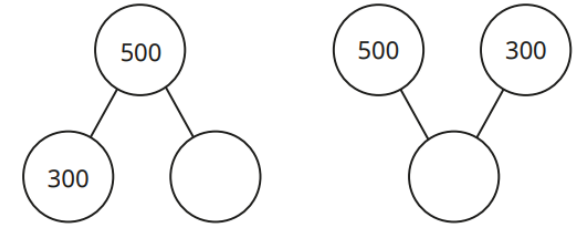
How many eggs were laid on Wednesday? \_\_\_\_\_

On Thursday, the hens lay 4 eggs.  
On Friday the hens lay one more egg than they did on Thursday.

Complete the pictogram.

## Previous learning

- 1 Complete the part-whole models.



- 2 Alex has 262 stickers.  
She buys 6 more stickers.  
How many stickers does Alex have now?

## We are currently learning


Work out the subtractions.

	T	O	
	8	5	
-	2	4	
_____			
_____			

	H	T	O
	3	2	8
-	1	0	7
_____			
_____			


	H	T	O
	7	2	9
-	3	0	9
_____			
_____			

## We are learning next

Teddy and Eva are both working out a subtraction. 

 I am working out  $75 - 33$

Teddy

 One of my numbers is 53

Eva

Teddy's answer is double Eva's answer.  
What could Eva's other number be?