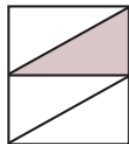
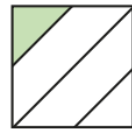
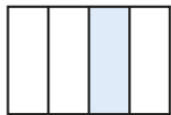
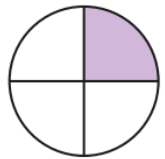



Last term **3** Tick the shapes that have $\frac{1}{4}$ shaded.



Previous learning

4 What numbers are shown?

a)



b)



We are currently learning

5 a) Draw an array to show 5×6

b) Draw an array to show 3×10

What do you notice?

We are learning next

- Ms Rose has 60 balloons. She shares them equally between 10 classrooms. How many balloons are in each classroom? Draw a bar model to represent this problem.

