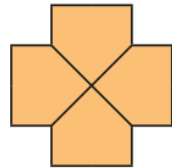
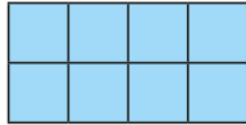
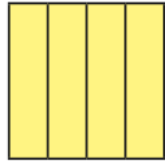
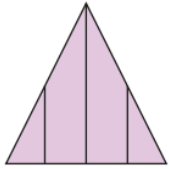


Last Term

Circle the shapes that have been split into equal parts



Previous learning

Write <, > or = to make the statements correct.

a) 1 kg ○ 1,000 g


b) 2 kg and 100 g ○ 2 kg and 700 g

c) 5 kg and 200 g ○ 1 kg and 200 g

Current learning


Work out the additions. Use the bar model to help you.

a)  $\frac{1}{3} + \frac{1}{3} =$

b)  $\frac{1}{5} + \frac{1}{5} =$

We are learning next

Complete the calculations to match the bar models



$\frac{1}{6} + \square = \frac{6}{6}$

$\frac{1}{6} + \square = 1$



$\frac{3}{7} + \square = \frac{7}{7}$

$\frac{3}{7} + \square = 1$