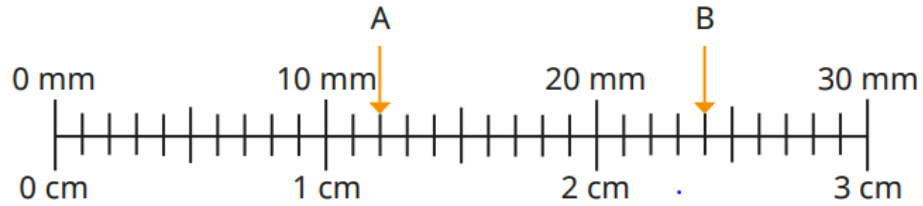


Last Term

What measurements are the arrows pointing to?

Complete the sentences.



▶ A = _____ cm and _____ mm


A = _____ mm

▶ B = _____ cm and _____ mm

B = _____ mm

Previous learning

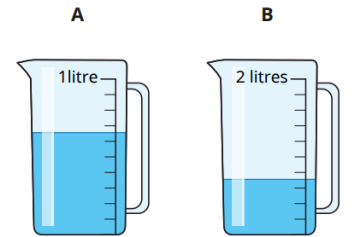
Rosie's water Max's water



Do you agree with Tiny?
Explain your answer.

Is the statement true or false?

The volume of water in jug A is greater than the volume of water in jug B.



Explain your answer.

Current learning

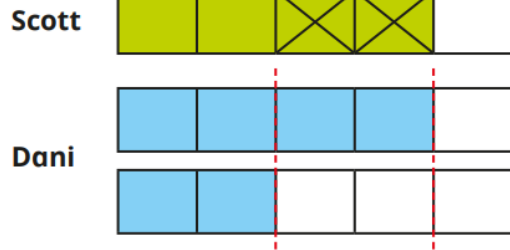
Tiny is working out $\frac{4}{7} + \frac{2}{7}$



The answer is $\frac{6}{14}$

Do you agree with Tiny?
Explain your answer.

Scott and Dani are working out $\frac{4}{5} - \frac{2}{5}$



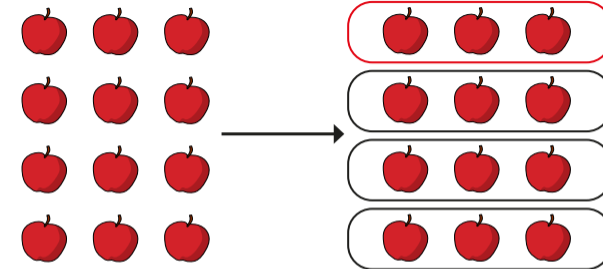
They both say that the answer is $\frac{2}{5}$

They are both correct.

Explain how they each worked it out.

We are learning next

Use the picture to complete the sentences.



The whole is 12 apples.

The whole is divided into _____ equal parts.

Each part is _____ of the whole.

$\frac{1}{4}$ of _____ apples is _____ apples.