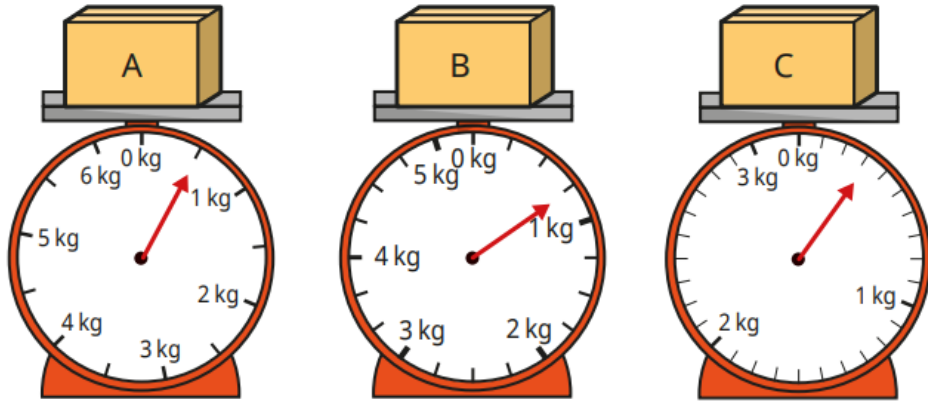


Last Term

- Work out the mass of each box.



Previous learning

There is a £10 note and three coins, so that is 10 pounds and 3 pence.

Is Tiny correct?
Explain your answer.

The children have some coins.

- Esther has five coins.
- Kim has four coins.
- Brett has three coins.
- Nijah has two coins.

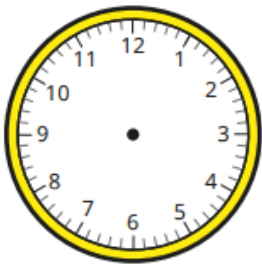
They each have 202p.

Which coins could they have?

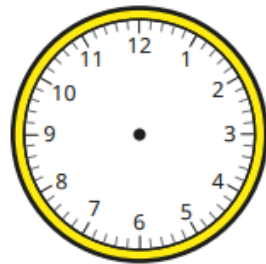


Current learning

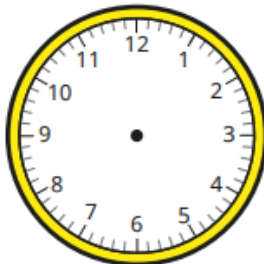
Draw the hands on the clocks to show the times.



8 minutes past 12



4 minutes to 4



17 minutes past 5

We are learning next

Complete the times shown on each clock.

6:20

_____ minutes past 6

6:23

_____ minutes past _____

3:40

_____ minutes past _____

_____ minutes to _____

3:50

_____ minutes past _____

_____ minutes to _____