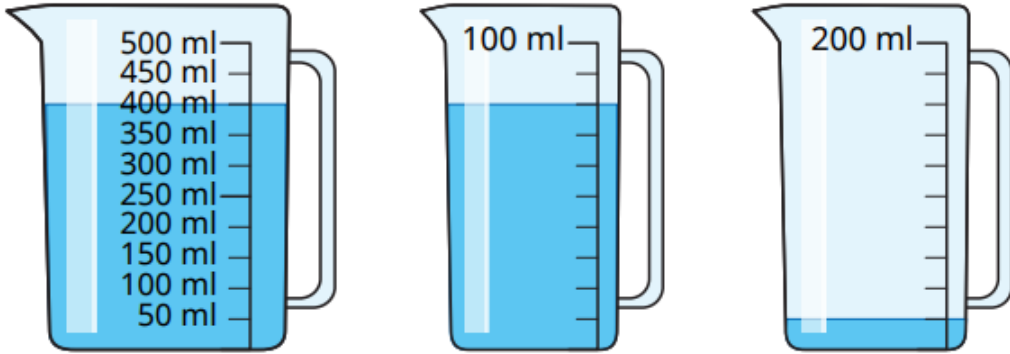


Last Term

What is the volume of water in each jug?



Previous learning

The arrow on a spinner starts in this position.



After making a turn, it ends in this position.



The arrow has moved a three-quarter turn clockwise.

Alex

The arrow has moved a quarter turn anticlockwise.

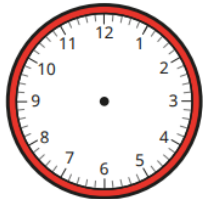
Jack

Who do you agree with?  
Explain your answer.

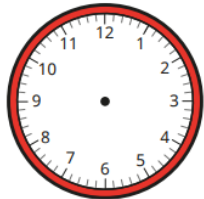


Current learning

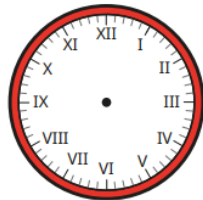
Draw hands to show the time on each clock.



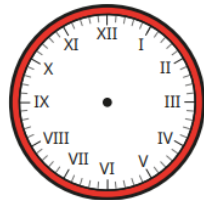
3 o'clock



half past 4



11 o'clock



half past 5

We are learning next

Complete the number lines and sentences.

