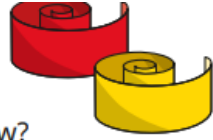



Last term

- Kim has 132 cm of ribbon.  
Her teacher gives her another 83 cm.  
What total length of ribbon does Kim have now?
- Tom has £283 and Esther has £68  
How much money do they have altogether?
- Nijah scores 376 points in a game.  
Scott scores 53 more points than Nijah.  
How many points do they score altogether?



Previous learning

- Ron has drawn an array to help him work out  $3 \times 8$



I can multiply 3 by 4 and then double it.



Use Ron's method to work out the multiplications.

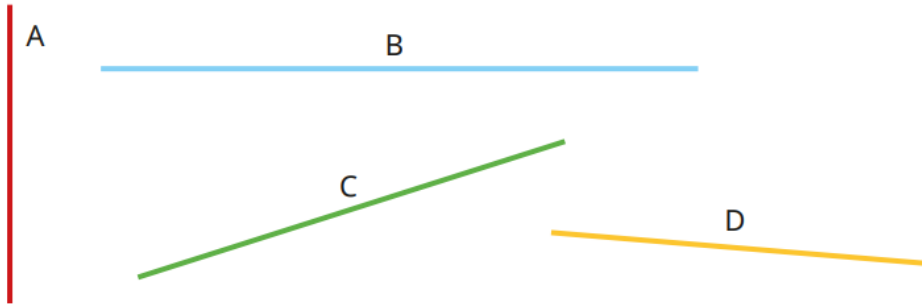
$5 \times 8$

$9 \times 8$

$7 \times 8$

We are currently learning

- Use a ruler to measure the lines.



We are learning next

- Complete the bar models.

