






Last term **3** The children of Class 1 chose their favourite colour out of yellow, green, blue and purple.

The pictogram shows their answers.

Key  = 1 child

Colour	Number of children
yellow	
green	
blue	
purple	

We are currently learning

3 Find the missing numbers.

a) $50 + \square = 100$

b) $250 + \square = 300$

c) $370 + \square = 400$

a) $130 - \square = 100$

b) $530 - \square = 500$

c) $534 - \square = 504$

d) $610 + \square = 700$

e) $560 + \square = 600$

f) $540 + \square = 600$

e) $100 - 20 = \square$

f) $300 - 20 = \square$

g) $304 - 20 = \square$

Previous learning

3 Complete the sentences.

a) 348 is equal to 3 hundreds, tens and ones.

b) 673 is equal to hundreds, tens and ones.

c) 792 is equal to hundreds, 9 _____ and 2 _____

d) 308 is equal to 3 _____ and 8 _____

e) is equal to 7 hundreds, 5 tens and 1 one.

f) is equal to 8 hundreds and 2 ones.

We are currently learning

We are learning next

		H	T	O	
		4	5	3	
	+	1	2	5	

		H	T	O	
		3	5	8	
	-	2	2	6	

