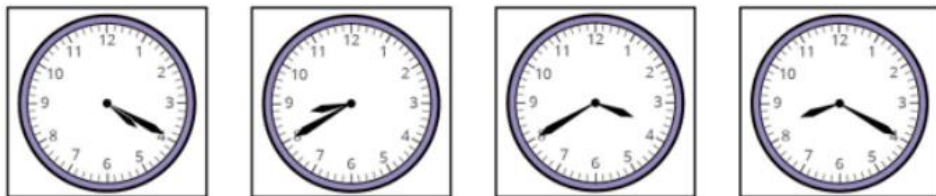


Last term

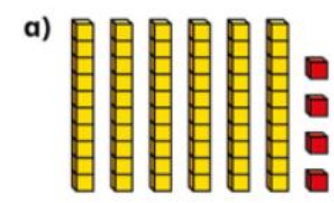
1 Match the clocks to the times.



- 20 minutes
to 9
- 20 minutes
past 4
- 20 minutes
to 4
- 20 minutes
past 8

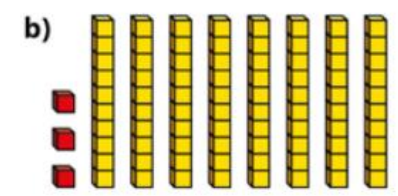
Previous learning

1 Complete the sentences.



64 = tens + ones

64 = +

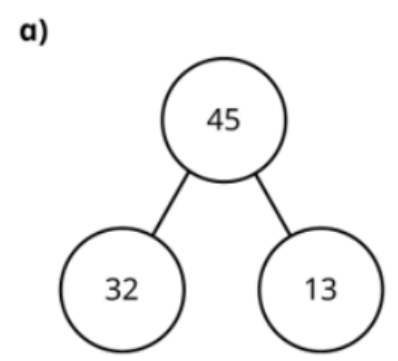


83 = tens + ones

83 = +

We are currently learning

1 Complete the fact family for each model.



+ =

+ =

- =

- =

We are learning next



There are bags.

Each bag has apples.

There are equal groups of