




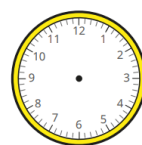
Last term

3 Draw hands on the clocks to show the times. Some have been started for you.

a)  10 minutes past 3

d)  5 minutes past 7





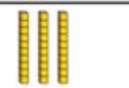

b)  20 minutes to 10

e)  10 minutes to 11

Previous learning


1 Complete the column additions.

a)

Hundreds	Tens	Ones
		
		
+		

	H	T	O
	2	8	1
+	4	3	6

We are currently learning

b) 


There are plates.

There are doughnuts on each plate.

There are doughnuts in total.

We are learning next

- Ron has drawn an array to help him work out 3×8



I can multiply 3 by 4 and then double it.



Use Ron's method to work out the multiplications.