






Last term (Y3)

Amir and Brett are looking for different kinds of flowers in the park.
Here is what they found.

Flower	Number found
dandelion	
rose	
tulip	
daisy	

Key
 = 4 flowers


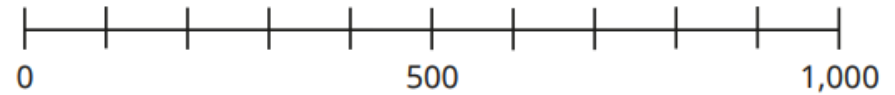
Use the pictogram to answer the questions.

- ▶ What kind of flower did they find the most of?
- ▶ How many more daisies did they find than roses?
- ▶ Which kind of flower did they find 14 of?
- ▶ How many tulips did they find?
- ▶ Is the statement true or false? How do you know?

Amir and Brett found the same number of tulips as daisies.

Previous learning...

Draw an arrow to show the position of 550 on each number line.



We are currently learning...

	Th	H	T	O	
	3	2	7	5	
+	6	1	5	6	
<hr/>					
<hr/>					

	Th	H	T	O	
	5	9	3	4	
+	2	2	4	6	
<hr/>					
<hr/>					

	Th	H	T	O	
	1	7	7	2	
+	2	2	5	0	
<hr/>					
<hr/>					

We are learning next...

Mrs Trent has £3,544
She spends £1,225
How much money does she have left?

Mrs Khan has £1,745
She has £1,239 more than Mr Khan.
How much money does Mr Khan have?