

Last term (Y4)

Which numbers can be divided into equal groups of 6?

24

18

48

60

9



56

72

38

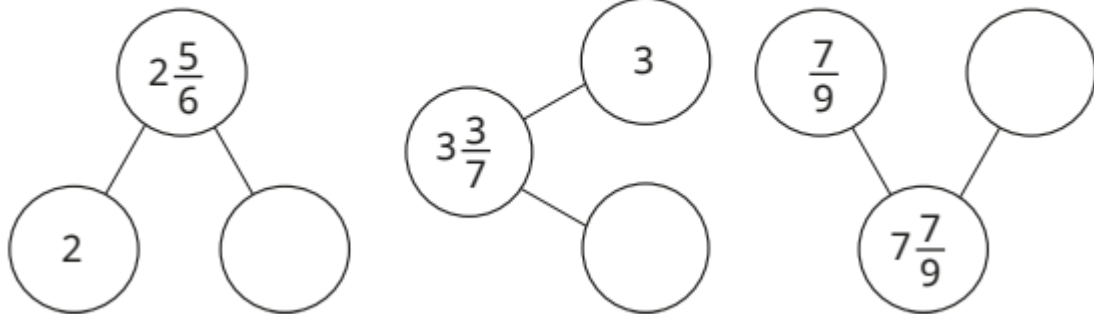
Previous learning...

Complete the number tracks.



We are currently learning...

Complete the part-whole models to show the wholes and fractions in the mixed numbers.



We are learning next...

Draw arrows to estimate the positions of the numbers on the number line.

