

Last term


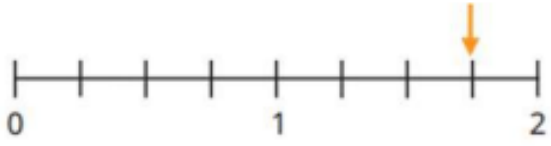
Complete the sentences.

57 rounded to the nearest 10 is _____

7,199 rounded to the nearest 1,000 is _____


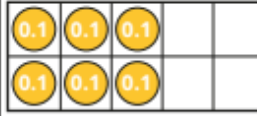
9,364 rounded to the nearest 10 is _____

Previous learning

Representation	Mixed number	Improper fraction
		$\frac{8}{3}$
	$1\frac{3}{4}$	

We are currently learning

Complete the table.

Picture	Words	Fraction	Decimal
	one tenth	$\frac{1}{10}$	0.1
			
			0.9

We are learning next

$3 \div 10$

$4 \div 10$

$7 \div 10$

$9 \div 10$