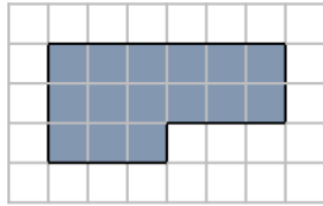
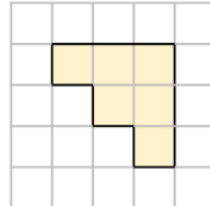


Last term

What is the area of each shape?




_____ squares



_____ squares

Draw a **rectangle** with an area of 15 squares.



Previous learning

Round the amounts to the nearest 10p.

47p 32p 89p 64p 75p 142p

How else can 142p be written?

We are currently learning

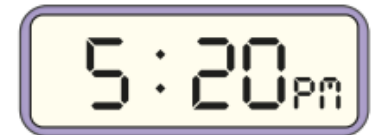
Complete the tables.

Days	Weeks
	1
	5
	10
	20
	80

Years	Months
	12
2	
	6
	48
10	

We are learning next

The time is 20 minutes past 5 in the evening.



Draw digital clocks to show what time it will be:

5 minutes later $\frac{1}{2}$ hour later

120 seconds later 20 minutes later