






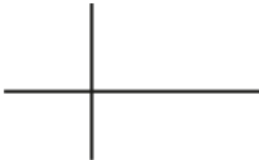
Last term (Y3)

There is at least one right angle in each picture.

Find all the right angles.





The first one has been done for you.

a)  c)  e) 

b)  d)  f) 

Previous learning...

Complete the sentences.

Th	H	T	O
			

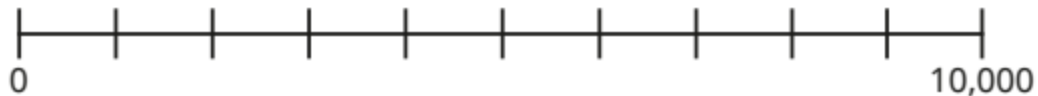
The number is

100 less than the number is

1 less than the number is

We are currently learning...

Label the number line with these numbers.



We are learning next...

a) Which numbers round to 8,000 when rounded to the nearest 100?

- | | | | |
|--------------|--------------|--------------|--------------|
| 8,120 | 8,500 | 7,550 | 7,970 |
| 7,099 | 8,950 | 8,050 | 8,045 |