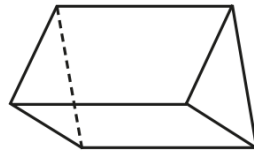


Last term (Y3)

Here is a picture of a 3-D shape.

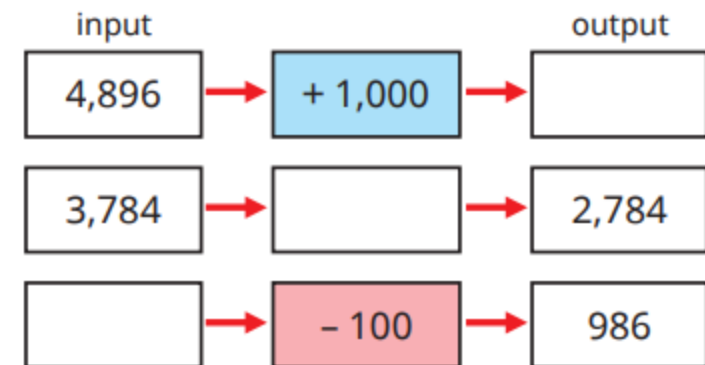


Complete the sentences.

The shape has  faces.The shape has  edges.The shape has  vertices.

Previous learning...

Complete the function machines.



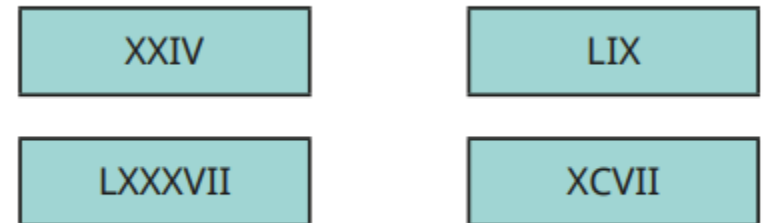
We are currently learning...

a) Which numbers round to 8,000 when rounded to the nearest 100?

<b>8,120</b>	<b>8,500</b>	<b>7,550</b>	<b>7,970</b>
<b>7,099</b>	<b>8,950</b>	<b>8,050</b>	<b>8,045</b>

We are learning next...

Four numbers are written in Roman numerals.



What are the numbers?