

Last term (Y6 Spring term) Ratio

Jack puts red and yellow tiles in this pattern.

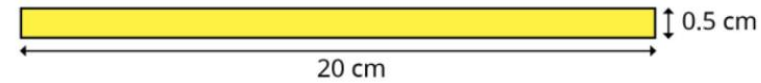
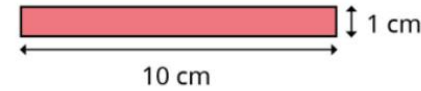
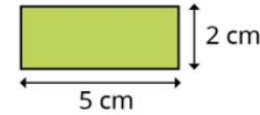


I have 16 more red tiles and 20 more yellow tiles.

Can Jack continue this pattern without there being any tiles left over?
Explain your answer.

Previous learning... Area

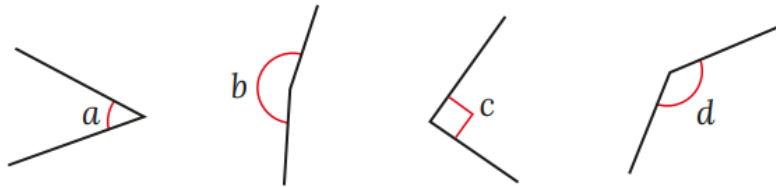
Which rectangle has the greatest area?



Sketch the next rectangle in the pattern.
What is its area?
How do you know?

We are currently learning... angles

- For each angle, choose a word to complete the sentence.



acute right obtuse reflex

Angle _____ is a/an _____ angle.

Order the angles from smallest to greatest.

We are learning next...missing angles in triangles

Work out the sizes of the angles marked with letters.

Explain each step in your workings.

