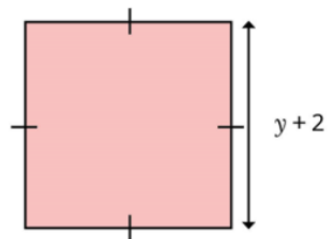
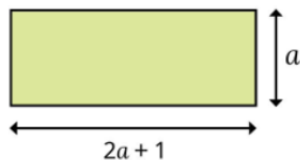
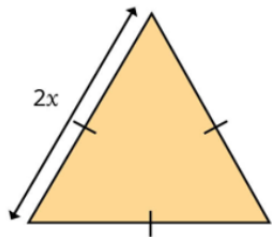



## Last term (Y6 Spring term) Algebra

Write expressions for the perimeters of the shapes.



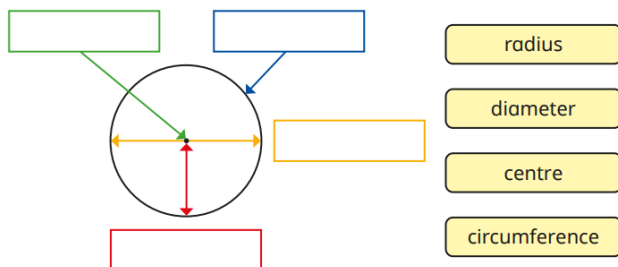
## Previous learning... Volume



What could the volume of this shape be?  
Compare answers with a partner.

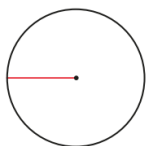
## We are currently learning... circles

Use the labels to complete the diagram.



- radius
- diameter
- centre
- circumference

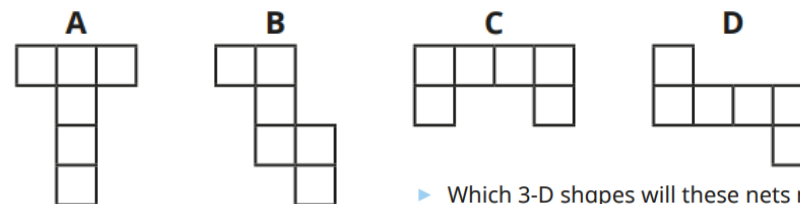
Filip has drawn a 5 cm straight line from the centre of the circle to its edge.



What is the name of the line Filip has drawn?

## We are learning next... nets

Which nets will fold up to make a cube?



- ▶ Which 3-D shapes will these nets make?
- ▶ What 2-D shapes is each net made up of?

