


Last term (Y6 Spring term)

Decimals


0.454   
 0.44   
 0.445   
 0.345

The children are each thinking of a different decimal number.




My number has four hundredths.

Amir




My number is the smallest.

Alex



The sum of the digits in my number is 13

Dora



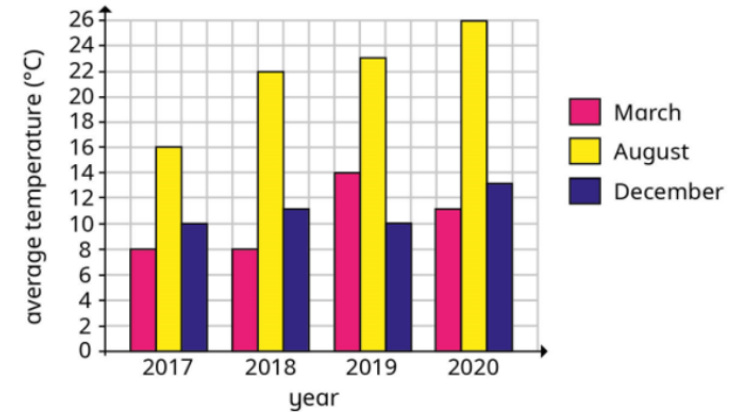
The tenths and hundredths digits in my number are different.

Dexter

Match each number to the correct child.

Previous learning... Statistics

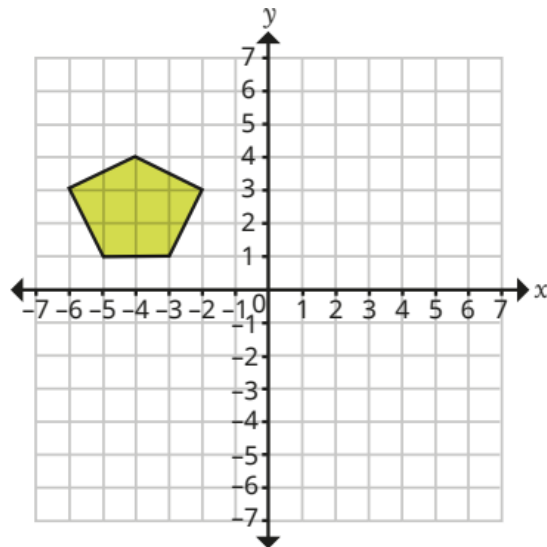
The bar chart shows the average temperature in a UK city.



Summarise what the chart tells you.  
 What questions could you ask a partner about this chart?

We are currently learning... reflection

- Reflect this shape in the x-axis and in the y-axis.
- What do you notice about the reflections?



We are learning next..

Practise arithmetic questions, times tables, number bonds, x, divide by 10, 100, 1000  
 😊