

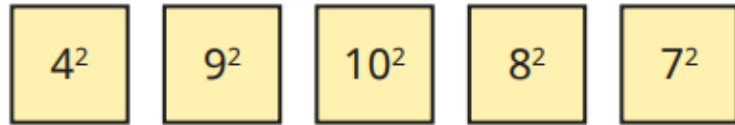
Last term (Y5)

A square number is found by multiplying a number by itself.

$5^2 = 5 \times 5$ and is said as "5 squared".

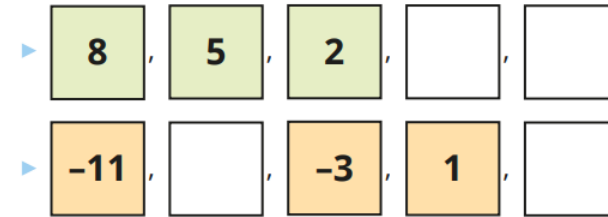
What is the value of 5^2 ?

Work out the values of the square numbers.



Previous learning...

- Complete the number sequences.



A company has plans to construct a building with floors above and below ground.



If we build from floor -10 to floor 10, we will have 20 floors in total.

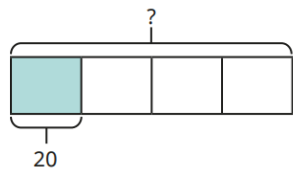
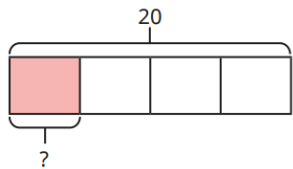
Do you agree? Explain your answer.

We are currently learning...

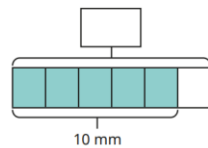
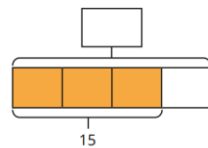
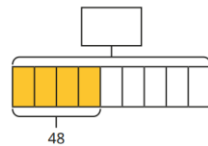
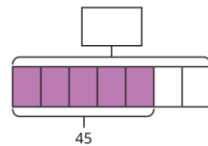
Complete the calculations.

$\frac{1}{4}$ of 20 = _____

$\frac{1}{4}$ of _____ = 20

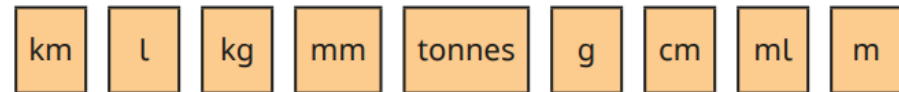


- Work out the missing wholes.



We are learning next...

Sort the units of measurement into the table.



Length	Mass	Capacity